
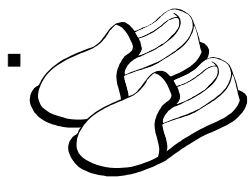


Μαθηματικά Α'



1. Συμπληρώνω τα κενά:



$$\square + \square + \square = \square$$

$$\square \times \square = \square$$



■



$$\square + \square = \square$$

$$\square \times \square = \square$$




■



$$\square + \square = \square$$

$$\square \times \square = \square$$

■



$$\square + \square + \square + \square = \square$$

$$\square \times \square = \square$$

2. Κάνω σχέδιο και συμπληρώνω:


- 3 λουλούδια σε κάθε βάζο



$$\square + \square + \square = \square$$

$$\square \times \square = \square$$

- 4 μήλα σε κάθε πιάτο



$$\square + \square = \square$$

$$\square \times \square = \square$$

3. Κάνω σχέδιο για τις μαθηματικές προτάσεις:

$$3 \times 2 = \underline{\quad}$$

$$5 \times 1 = \underline{\quad}$$

$$4 \times 2 = \underline{\quad}$$

$$1 \times 6 = \underline{\quad}$$

Όνομα: Ημερομηνία: