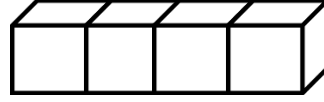
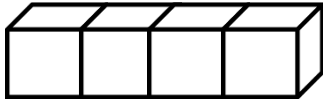




ΔΗΜΟΤΙΚΟ ΣΧΟΛΕΙΟ .....

Όνομα: \_\_\_\_\_ Τάξη: \_\_\_\_\_

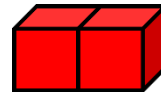
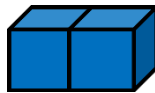
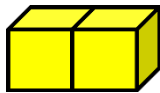
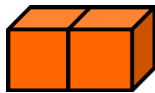
**Εισαγωγή στον πολλαπλασιασμό**



$$\square + \square = \square$$

$\square$  φορές  $\square$  κάνουν  $\square$

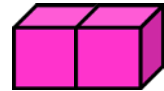
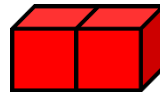
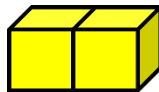
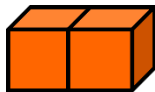
$$\square \times \square = \square$$



$$\square + \square + \square + \square = \square$$

$\square$  φορές  $\square$  κάνουν  $\square$

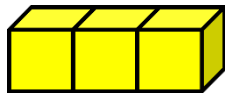
$$\square \times \square = \square$$



$$\square + \square + \square + \square + \square = \square$$

$\square$  φορές  $\square$  κάνουν  $\square$

$$\square \times \square = \square$$

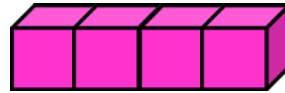
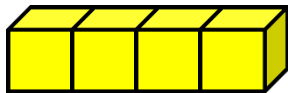


$$\square + \square = \square$$

$\square$  φορές  $\square$  κάνουν  $\square$

$$\square \times \square = \square$$

---






$$\square + \square = \square$$

$\square$  φορές  $\square$  κάνουν  $\square$

$$\square \times \square = \square$$

---

2. Σχεδίασε 2 κεράκια σε κάθε τούρτα:



$$\square + \square + \square = \square$$

$\square$  φορές  $\square$  κάνουν  $\square$

$$\square \times \square = \square$$