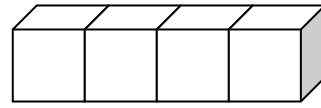
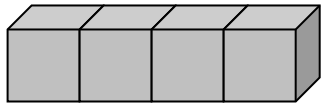


Εισαγωγή στον πολλαπλασιασμό

1. Συμπλήρωσε τις μαθηματικές προτάσεις:

α.

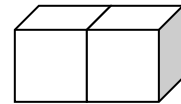
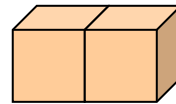
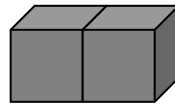
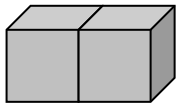


$$\square + \square = \square$$

\square φορές \square κάνουν \square

$$\square \times \square = \square$$

β.

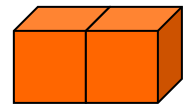
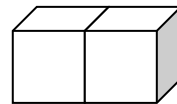
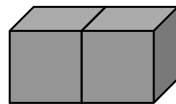
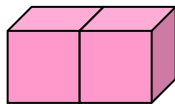
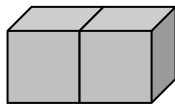


$$\square + \square + \square + \square = \square$$

\square φορές \square κάνουν \square

$$\square \times \square = \square$$

γ.

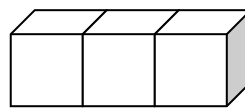
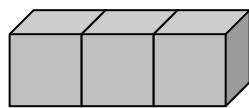


$$\square + \square + \square + \square + \square = \square$$

\square φορές \square κάνουν \square

$$\square \times \square = \square$$

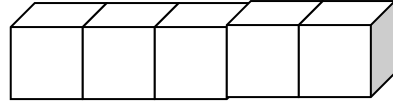
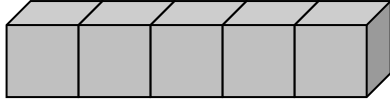
δ.



$$\square + \square = \square$$

$$\square \times \square = \square$$

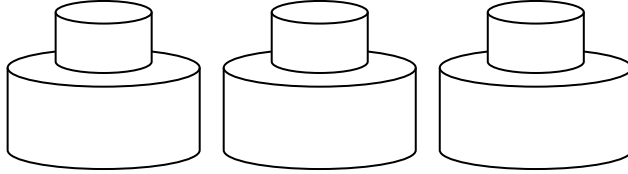
ε.



$$\square + \square = \square$$

$$\square \times \square = \square$$

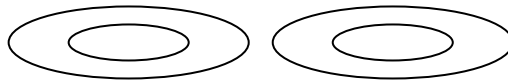
2. Σχεδιάσε 2 κεράκια σε κάθε τούρτα:



$$\square + \square + \square = \square$$

$$\square \times \square = \square$$

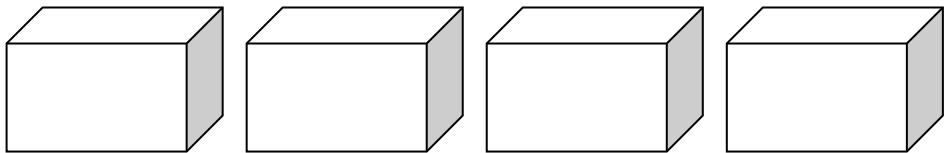
3. Σχεδιάσε 3 μήλα σε κάθε πιάτο:



$$\square + \square = \square$$

$$\square \times \square = \square$$

4. Σχεδιάσε 1 μπάλα σε κάθε κουτί:



$$\square + \square + \square + \square = \square$$

$$\square \times \square = \square$$

Όνομα: _____ Τάξη: _____ Ημερ.: _____